

Number Bond Sticks

Can you complete these number sentences using number bonds to 10?



$$7 + 3 = 10$$

Can you write a matching number sentence below each stick?



$$\square + \square = 10$$



$$\square + \square = 10$$



$$\square + \square = 10$$




$$\square + \square = 10$$



$$\square + \square = 10$$



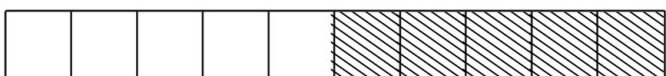
$$\square + \square = 10$$



$$\square + \square = 10$$



$$\square + \square = 10$$



$$\square + \square = 10$$



$$\square + \square = 10$$


Number Bond Sticks - Extension

This number bond stick is made from 7 plain cubes and 3 striped cubes.




$$7 + 3 = 10$$


Can you use two colours to make your own sticks with number bonds of 10?
Can you write a matching number sentence below each picture?



$$\square + \square = 10$$



$$\square + \square = 10$$



$$\square + \square = 10$$



$$\square + \square = 10$$